

* 0019654982601 *



Cambridge Assessment
International Education



Cambridge International AS & A Level

CANDIDATE
NAME

CENTRE
NUMBER

--	--	--	--	--

CANDIDATE
NUMBER

--	--	--	--

PHYSICS

9702/33

Paper 3 Advanced Practical Skills 1

May/June 2024

2 hours

You must answer on the question paper.

You will need: The materials and apparatus listed in the confidential instructions

INSTRUCTIONS

- Answer **all** questions.
- Use a black or dark blue pen. You may use an HB pencil for any diagrams or graphs.
- Write your name, centre number and candidate number in the boxes at the top of the page.
- Write your answer to each question in the space provided.
- Do **not** use an erasable pen or correction fluid.
- Do **not** write on any bar codes.
- You will be allowed to work with the apparatus for a maximum of 1 hour for each question.
- You should record all your observations in the spaces provided in the question paper as soon as these observations are made.
- You may use a calculator.
- You should show all your working and use appropriate units.

INFORMATION

- The total mark for this paper is 40.
- The number of marks for each question or part question is shown in brackets [].

For Examiner's Use	
1	
2	
Total	

This document has **12** pages. Any blank pages are indicated.



You may not need to use all of the materials provided.

- 1 In this experiment, you will investigate a balanced metre rule.

You have been provided with a metre rule and some masses.

- (a) • Place the masses on the rule as shown in Fig. 1.1.

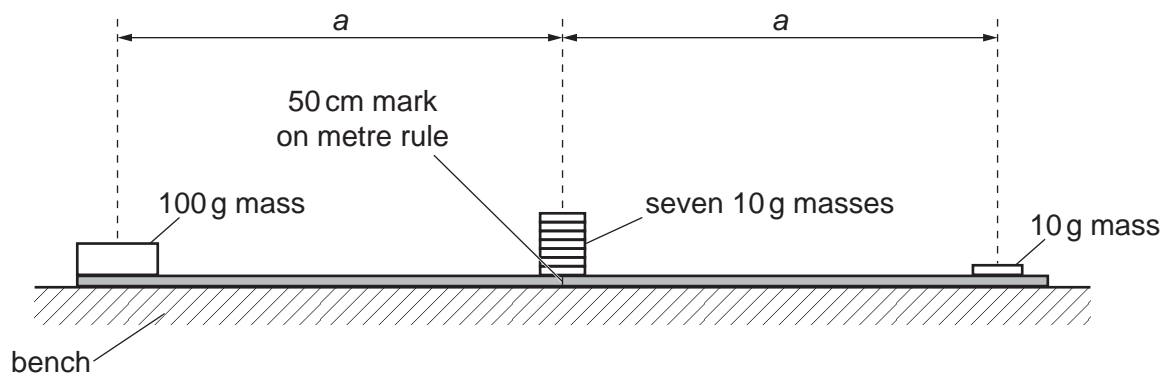


Fig. 1.1

- Place the 100 g mass at one end of the rule.
- The distance between the centre of the 100 g mass and the 50 cm mark on the rule is a . Measure and record a .

$a = \dots\dots\dots$

- Place a 10 g mass so that its centre is distance a from the 50 cm mark on the rule.
- Secure this mass in place using the adhesive putty. **This mass must remain in place throughout the experiment.**
- Place seven 10 g masses so that their centres are above the 50 cm mark on the rule.

[1]



- (b)
- Transfer n of the 10g masses, where $n = 4$, from the centre of the rule onto the 10g mass near the end of the rule.
 - Carefully place the rule and masses on the pivot as shown in Fig. 1.2.

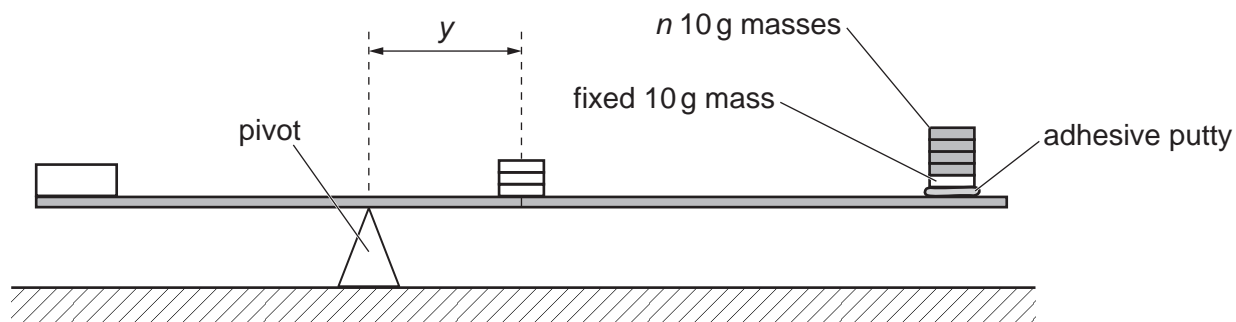


Fig. 1.2

- Adjust the position of the rule on the pivot until the rule is balanced.
- The distance between the pivot and the 50cm mark on the rule is y .

Record n and y .

$n =$

$y =$

- Remove the rule from the pivot and place it on the bench.
- Return the n 10g masses to the 50cm mark.

[1]





- (c) Change n by moving some of the 10 g masses from the centre of the rule onto the 10 g mass near the end of the rule and determine y .

Repeat until you have six sets of values of n and y .

Record your results in a table.

Include values of $\frac{1}{n}$ and $\frac{y}{n}$ to three significant figures.

[9]

- (d) (i) Plot a graph of $\frac{y}{n}$ on the y -axis against $\frac{1}{n}$ on the x -axis.

[3]

- (ii) Draw the straight line of best fit.

[1]

- (iii) Determine the gradient and y -intercept of this line.


gradient =

y -intercept =

[2]



* 0019654982605 *





- (e) It is suggested that the quantities y and n are related by the equation

$$\frac{y}{n} = \frac{P}{n} - Q$$

where P and Q are constants.

Using your answers in (d)(iii), determine the values of P and Q .
Give appropriate units.

$$P = \dots\dots\dots$$

$$Q = \dots\dots\dots [2]$$

- (f) Theory suggests that

$$P = \frac{9Ma}{18M + R}$$

where $M = 10\text{ g}$ and R is the mass of the rule.

Determine the value of R .

$$R = \dots\dots\dots \text{ g } [1]$$

[Total: 20]



You may not need to use all of the materials provided.

2 In this experiment, you will investigate the properties of a rubber band.

(a) (i) • Set up the apparatus as shown in Fig. 2.1.

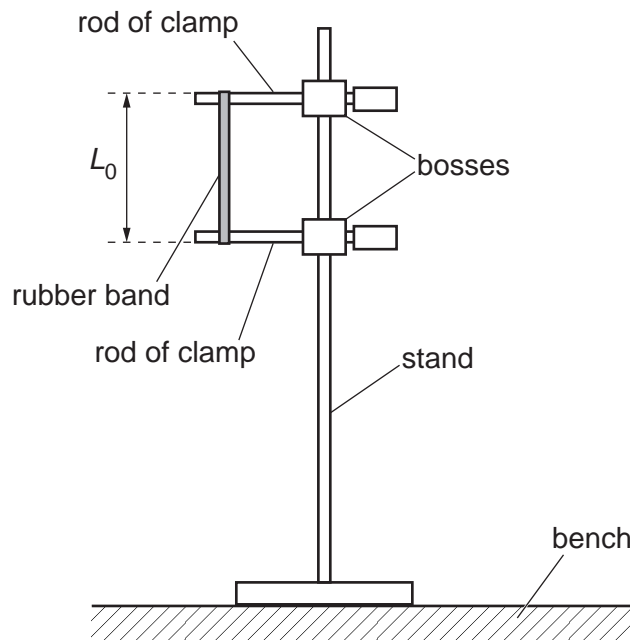


Fig. 2.1

- The rubber band should be straight but not stretched.

The distance between the ends of the rubber band is L_0 , as shown in Fig. 2.1.

Measure and record L_0 .

$L_0 = \dots\dots\dots$ [1]

(ii) Estimate the percentage uncertainty in your value of L_0 . Show your working.

percentage uncertainty = $\dots\dots\dots$ % [1]





- (b) The width of the unstretched rubber band is w_0 and its thickness is t , as shown in Fig. 2.2.

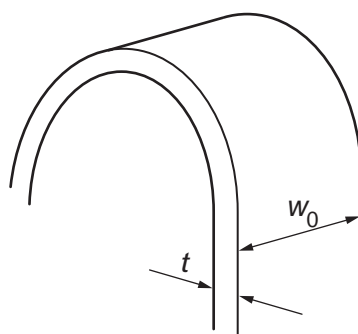


Fig. 2.2

Measure and record w_0 and t .

$w_0 =$

$t =$

[2]

- (c) (i) • Increase the distance between the clamps until the distance between the ends of the rubber band is approximately $1.5 L_0$.
- The distance between the ends of the rubber band is L .

The width of the rubber band is w .

Measure and record L and w .

$L =$

$w =$

[1]

- (ii) Calculate ΔL and Δw , where $\Delta L = L - L_0$ and $\Delta w = w_0 - w$.

$\Delta L =$

$\Delta w =$

[1]

- (iii) Justify the number of significant figures that you have given for your value of ΔL .

.....

.....

..... [1]



* 0019654982709 *



9



- (d) • Increase the distance between the clamps until the distance between the ends of the rubber band is approximately $2L_0$.

- Measure and record L and w .

$L =$

$w =$

- Repeat (c)(ii).

$\Delta L =$

$\Delta w =$

[2]

- (e) It is suggested that the relationship between Δw and ΔL is

$$\frac{\Delta L}{\Delta w} = k$$

where k is a constant.

Using your data, calculate two values of k .

first value of $k =$

second value of $k =$

[1]





- (f) It is suggested that the percentage uncertainty in the values of k is 25%.

Using this uncertainty, explain whether your results support the relationship in (e).

.....

.....

.....

..... [1]

- (g) The approximate force F acting on the rubber band is given by

$$F = \frac{2Et\kappa w_0 \Delta w}{L_0}$$

where the Young modulus E of rubber is $1.0 \times 10^6 \text{ N m}^{-2}$.

Use your second value of k and your value of Δw from (d) to determine a value for F .

$$F = \dots\dots\dots \text{ N [1]}$$





(h) (i) Describe **four** sources of uncertainty or limitations of the procedure for this experiment.

For any uncertainties in measurement that you describe, you should state the quantity being measured and a reason for the uncertainty.

1

.....

2

.....

3

.....

4

.....

[4]

(ii) Describe **four** improvements that could be made to this experiment. You may suggest the use of other apparatus or different procedures.

1

.....

2

.....

3

.....

4

.....

[4]

[Total: 20]



* 0019654982712 *



12

BLANK PAGE



DO NOT WRITE IN THIS MARGIN

DO NOT WRITE IN THIS MARGIN

DO NOT WRITE IN THIS MARGIN

DO NOT WRITE IN THIS MARGIN

DO NOT WRITE IN THIS MARGIN

Permission to reproduce items where third-party owned material protected by copyright is included has been sought and cleared where possible. Every reasonable effort has been made by the publisher (UCLES) to trace copyright holders, but if any items requiring clearance have unwittingly been included, the publisher will be pleased to make amends at the earliest possible opportunity.

To avoid the issue of disclosure of answer-related information to candidates, all copyright acknowledgements are reproduced online in the Cambridge Assessment International Education Copyright Acknowledgements Booklet. This is produced for each series of examinations and is freely available to download at www.cambridgeinternational.org after the live examination series.

Cambridge Assessment International Education is part of Cambridge Assessment. Cambridge Assessment is the brand name of the University of Cambridge Local Examinations Syndicate (UCLES), which is a department of the University of Cambridge.

